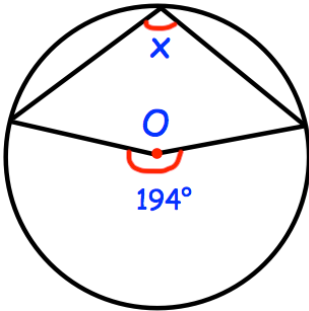





Solve, giving your answers to one decimal place.

$$3x^2 + 4x - 5 = 0$$

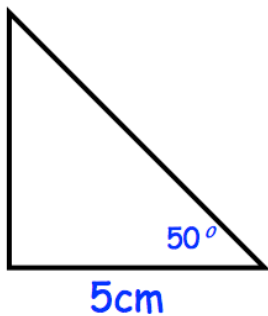


Find x

length (l cm)	Frequency
$0 < l \leq 8$	16
$8 < l \leq 10$	7
$10 < l \leq 12$	9
$12 < l \leq 16$	6
$16 < l \leq 20$	2



Draw a histogram to show this information.



Calculate the perimeter of the right angled triangle.