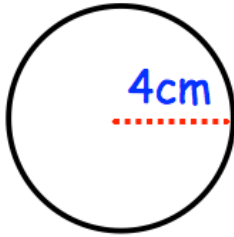
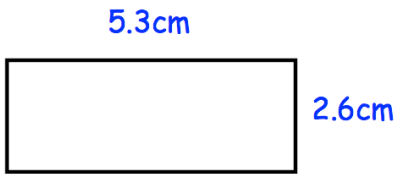




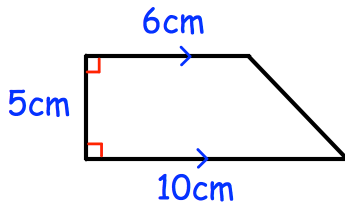
Find the circumference



Shown below is a rectangle.



Find the perimeter of the rectangle.



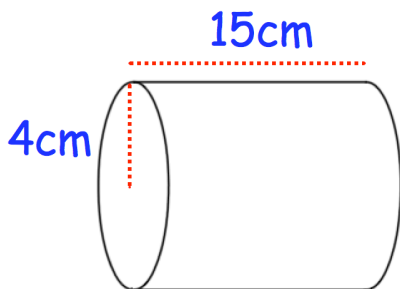
Find the area of the trapezium.

Marley has 5 cards, each with a number written on it.

The median is 9
The mode is 12
The range is 7

Write down a possible set of numbers Marley could have.

○ ○ ○ ○ ○



Calculate the volume